

28.01.21

LO: To understand that capacity can be represented by number.

Top Tip: Read the questions carefully. You can draw pictures to help you if you need to.



The capacity of the jug is cups.

It takes four  to fill one .


How many cups will be needed to fill two jugs?


How many cups will be needed to fill three jugs?



How many cups will be needed to fill two buckets?

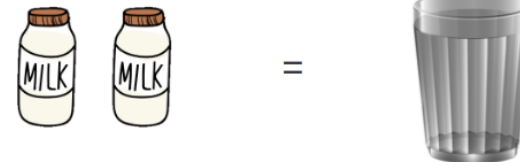

How many cups will be needed to fill three buckets?





Suzy has 15 .

How many jugs can she fill?

To measure the capacity of the jug using the cups, I need to fill each cup to the top. Is that right?



Peter says that to fill four , you would need four .

Explain why Peter is wrong.