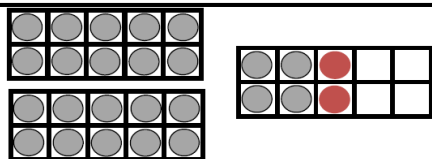


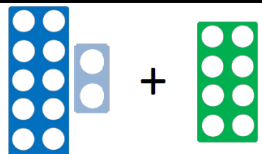
Year 2 Fluent in 5

Day 1

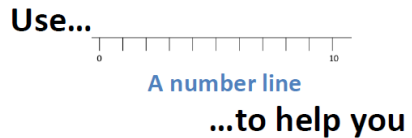
A. $26 - 24 =$



B. $12 + 8 =$



C. $45 + 36 =$

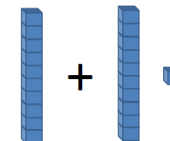


Day 2

A. $39 + 42 =$

You choose...
...what to use...
...to help you

B. $10 + 11 =$



C. 4 lots of 5 =

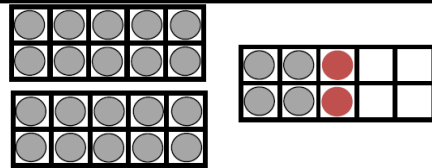


Year 2 Fluent in 5

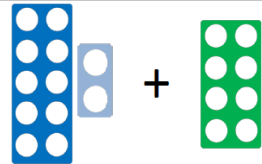
Answers

Day 1

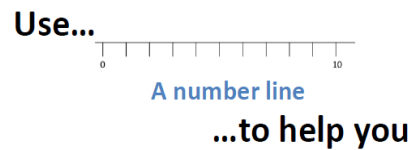
A. $26 - 24 = 2$



B. $12 + 8 = 20$



C. $45 + 36 = 81$



Day 2

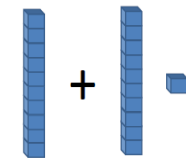
A. $39 + 42 = 81$

You choose...


...what to use...

...to help you

B. $10 + 11 = 21$



C. 4 lots of 5 = 20




Year 1 Fluent in 5

Day 1

Year 1 Fluent in 5

Day 2

1. $20 - 3 = ?$



1. Double 4 =

Use...



Number shapes

...to help you

2. $18 + 2 = ?$

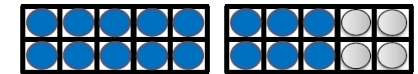
Use...



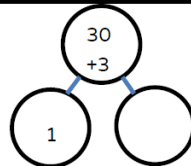
Number shapes

...to help you

2. $20 - 4 = ?$



3. $33 - 1 = ?$



3. Half of 4 = ?




Year 1 Fluent in 5

Answers

Day 1

(answers)

1. $20 - 3 = 17$



2. $18 + 2 = 20$

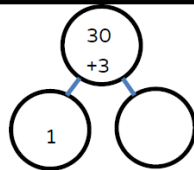
Use...



Number shapes

...to help you

3. $33 - 1 = 32$



Day 2

Use...

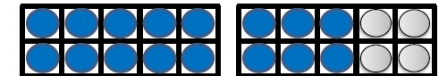


Number shapes

...to help you

1. Double 4 = 8

2. $20 - 4 = 16$



3. Half of 4 = 2

